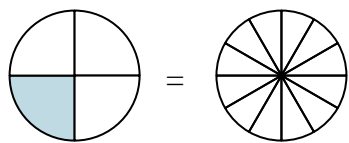


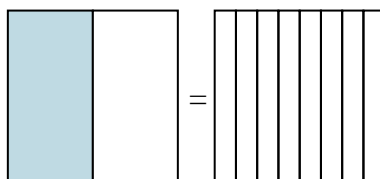


Shade in the visual fraction to find the equivalent fraction.

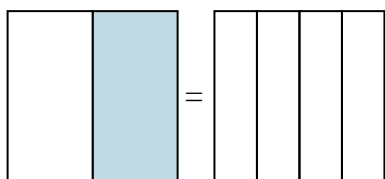
Ex) $\frac{1}{4} = \frac{3}{12}$



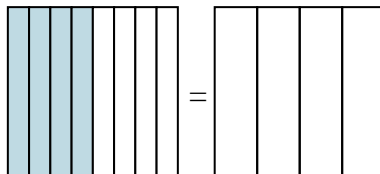
1) $\frac{1}{2} =$



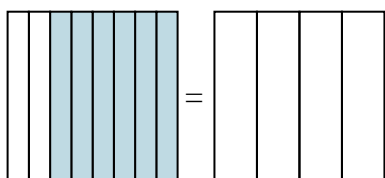
2) $\frac{1}{2} =$



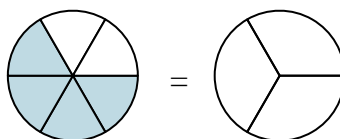
3) $\frac{4}{8} =$



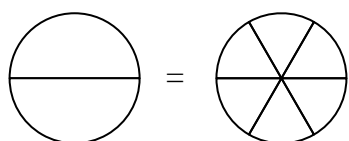
4) $\frac{6}{8} =$



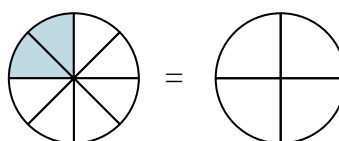
5) $\frac{4}{6} =$



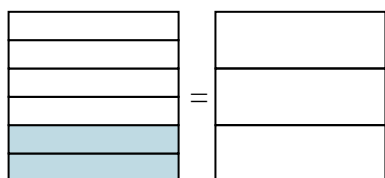
6) $\frac{0}{2} =$



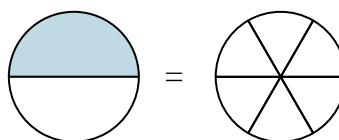
7) $\frac{2}{8} =$



8) $\frac{2}{6} =$



9) $\frac{1}{2} =$



Answers

Ex. $\frac{3}{12}$

1. _____

2. _____

3. _____

4. _____

5. _____

6. _____

7. _____

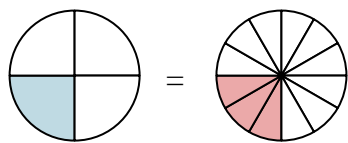
8. _____

9. _____

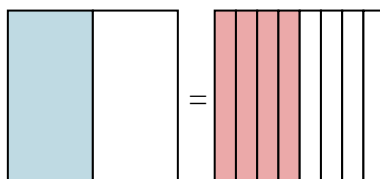


Shade in the visual fraction to find the equivalent fraction.

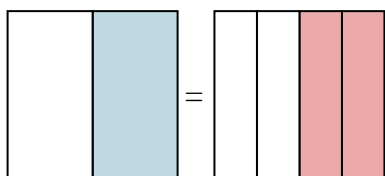
Ex) $\frac{1}{4} = \frac{3}{12}$



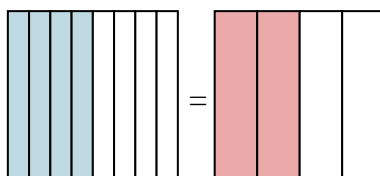
1) $\frac{1}{2} = \frac{4}{8}$



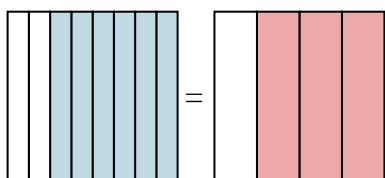
2) $\frac{1}{2} = \frac{2}{4}$



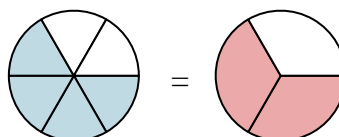
3) $\frac{4}{8} = \frac{2}{4}$



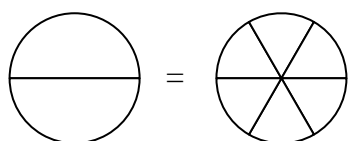
4) $\frac{6}{8} = \frac{3}{4}$



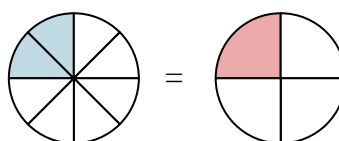
5) $\frac{4}{6} = \frac{2}{3}$



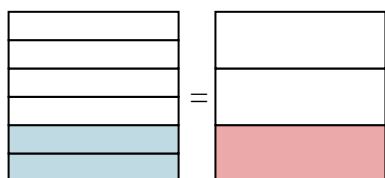
6) $\frac{0}{2} = \frac{0}{6}$



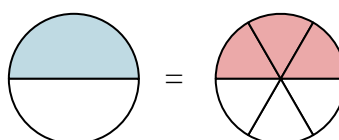
7) $\frac{2}{8} = \frac{1}{4}$



8) $\frac{2}{6} = \frac{1}{3}$



9) $\frac{1}{2} = \frac{3}{6}$



Answers

Ex. $\frac{3}{12}$

1. $\frac{4}{8}$

2. $\frac{2}{4}$

3. $\frac{2}{4}$

4. $\frac{3}{4}$

5. $\frac{2}{3}$

6. $\frac{0}{6}$

7. $\frac{1}{4}$

8. $\frac{1}{3}$

9. $\frac{3}{6}$